

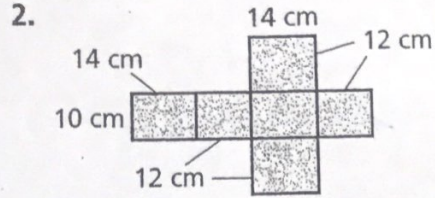
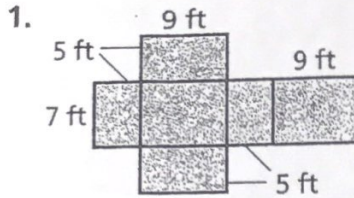


2.02, 3.01a

**GUIDED PRACTICE**

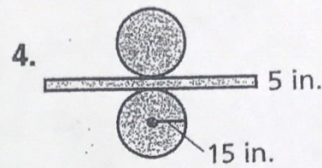
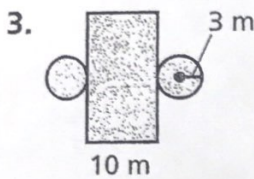
See Example 1

Find the surface area of the prism formed by each net.



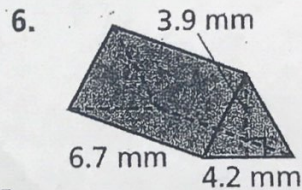
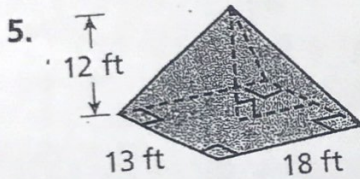
See Example 2

Find the surface area of the cylinder formed by each net to the nearest tenth. Use 3.14 for  $\pi$ .



See Example 3

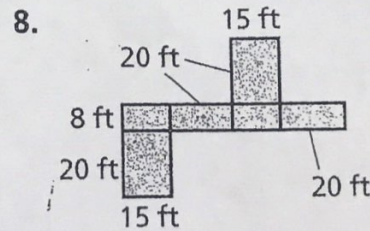
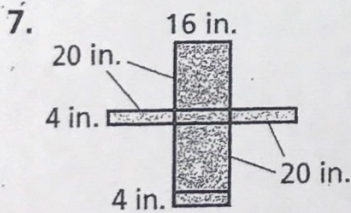
Find the surface area of each sphere to the nearest tenth. Use 3.14 for  $\pi$ .



**INDEPENDENT PRACTICE**

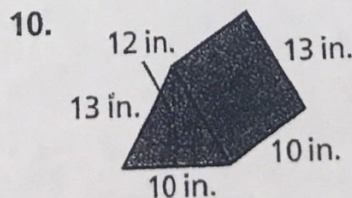
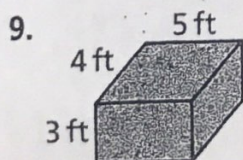
See Example 1

Find the surface area of the prism formed by each net.



See Example 2

Find the surface area of the cylinder formed by each net to the nearest tenth. Use 3.14 for  $\pi$ .



See Example 3

Find the surface area of each sphere to the nearest tenth. Use 3.14 for  $\pi$ .

