


Name: _____

Date: _____ Period: _____

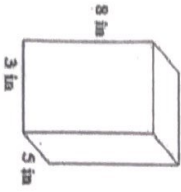
Finding Surface Area of Rectangular Prisms

Find the surface area of the following prisms. Be sure to show all steps and work to support your final answers.

1.



2.



3.



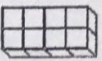
4.



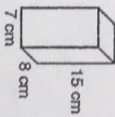
Name: _____

Date: _____ Period: _____

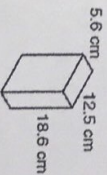
5.



6.



7.



8.

